

THE CHURCH OF LIGHT, Box 1525, Los Angeles 53, Calif., U. S. A.  
Branch Letter--A.  
Serial No. 86

Course VIII  
Branch of Science--Horary Astrology.  
Part I--How To Erect A Horoscope

Examination Questions

1. What three factors are necessary to erect a horoscope?
2. In subtracting geographical longitude, if the minuend is too small to permit subtraction, what must be done?
3. Why should the KIND of time used at the date and place of birth always be carefully ascertained?
4. How much reliance can be placed in actual practice on the theoretical boundaries of the Standard Time Zones as exactly  $7\frac{1}{2}$  East and  $7\frac{1}{2}$  West of the Standard Meridian?
5. Is it necessary to have a Table of Houses for each year?
6. When Daylight Saving Time is given, what correction is necessary to convert into Standard Time?
7. What is the DOMINANT FACTOR?
8. Given a Pacific Standard Time of 6h 30m a.m. at  $122\frac{1}{2}$  W. Longitude, what is the LMT?
9. Given a Mountain Standard Time of 8h 00m p.m. at 103 W. Longitude, what is the LMT?
10. What is the FIRST KEY PROBLEM?
11. Given a LMT of 5h 40m p.m. Jan. 2, 1920, at New York, what is the Sidereal Time?
12. Given a LMT of 5h 40m a.m. Jan. 2, 1920, at New York, what is the Sidereal Time?
13. When the Sidereal Time at New York is 15h 6m, show by means of a map the positions of the signs on the houses.
14. When it is found some of the signs are missing after they have been copied from a table of houses to house-cusps, what is done?
15. What is the SECOND KEY PROBLEM?
16. What is the difference in time between Greenwich and Washington, D.C. in Longitude 77W?
17. What is meant by a Plus Interval, and by a Minus Interval?
18. Given a LMT of 6h 36m a.m. at Washington, D. C., in Longitude 77W, what is the EGMT Interval?
19. Given a LMT of 3h 31m p.m. at Rome, Italy, in Longitude  $12\frac{1}{2}$  East, what is the EGMT Interval?
20. Given the EGMT Interval of Plus 9h 46m, what is the Constant Logarithm?
21. Given the noon position of the Moon on Jan. 11 as Libra  $2^{\circ} 46'$  and its noon position on Jan. 12 as Libra  $15^{\circ} 18'$ , what is the daily motion by Longitude?
22. Given a planet's daily motion as  $11^{\circ} 56'$ , what is the Proportional Logarithm of its daily motion?
23. Given the Constant Logarithm and the logarithm of a planet's daily motion, how is the distance the planet travels during the INTERVAL found?
24. If the position of the Moon is Sagittarius  $14^{\circ} 51'$ , and its travel during the Minus Interval is  $3^{\circ} 21'$ , what is its Longitude?
25. When the declination of a planet is N.  $16^{\circ} 42'$  at noon in the ephemeris, and the declination is decreasing, what is the declination of the planet if it travels  $58'$  during a Plus Interval?



Course VIII  
Branch of Science--Theory Astronomy  
Part I--The Moon & Horology

Examination Questions

1. What three factors are necessary to establish a horizon?
2. In what direction does the Earth rotate? What is the rate of rotation?
3. Why should the kind of time used be stated and placed in brackets?
4. How much rotation can be placed in each 24-hour period? How is the Earth's rotation measured?
5. What is the Earth's rotation rate in terms of hours and minutes?
6. When daylight saving time is given, what correction is necessary to convert into standard time?
7. What is the STANDARD TIME?
8. Given a certain standard time, what is the local time?
9. Given a certain standard time, what is the local time?
10. What is the difference between the two times?
11. Given a certain standard time, what is the local time?
12. What is the difference between the two times?
13. Given a certain standard time, what is the local time?
14. What is the difference between the two times?
15. Given a certain standard time, what is the local time?
16. What is the difference between the two times?
17. Given a certain standard time, what is the local time?
18. What is the difference between the two times?
19. Given a certain standard time, what is the local time?
20. What is the difference between the two times?
21. Given a certain standard time, what is the local time?
22. What is the difference between the two times?
23. Given a certain standard time, what is the local time?
24. What is the difference between the two times?
25. Given a certain standard time, what is the local time?
26. What is the difference between the two times?
27. Given a certain standard time, what is the local time?
28. What is the difference between the two times?
29. Given a certain standard time, what is the local time?
30. What is the difference between the two times?
31. Given a certain standard time, what is the local time?
32. What is the difference between the two times?
33. Given a certain standard time, what is the local time?
34. What is the difference between the two times?
35. Given a certain standard time, what is the local time?
36. What is the difference between the two times?
37. Given a certain standard time, what is the local time?
38. What is the difference between the two times?
39. Given a certain standard time, what is the local time?
40. What is the difference between the two times?



THE CHURCH OF LIGHT, Box 1525, Los Angeles 53, Calif., U.S.A.  
Serial No. 87.  
Branch Letter B.


Course VIII.

Branch of Science-- Horary Astrology  
How to Determine the Strength and Aspects of the Planets

Examination Questions

1. Explain what is meant by Essential Dignity.
2. How is the sign of a planet's Fall known from its Exaltation?
3. Explain the meaning of a sign being Ruled by a certain planet.
4. In what way do the sensations of the astral body influence man's conduct?
5. What one word in each case best signifies the most pronounced influence of each of the Ten aspects?
6. Explain what is, really meant by Orb of Influence.
7. In which houses are planets Powerful; which Very Powerful?
8. Explain the most expedient way of finding the Semi-Squares and Sesqui-Squares in a horoscope.
9. When determining the aspects in a chart, in which direction of the zodiac should the aspects always be calculated?
10. Under what circumstances is the expression of an aspect strongest and clearest?
11. Why are Square aspects a pronounced factor in the birth charts of all great men?
12. Name each of the ten aspects and give the number of degrees in each.
13. Explain what is meant by Accidental Dignity.
14. How is the sign of a planet's Detriment known from the sign of its Home?
15. Explain the manner in which a planet becomes Exalted in a certain Sign.
16. What are the Four Chief requisites for judging any horoscope?
17. Due to what reactions do most of the actions of life spring into being?
18. What is meant by the Fixed Cross; the Movable Cross; and the Mutable Cross?
19. What is signified by aspects Applying?
20. What is signified by aspects Separating?
21. Why do too many trines and too few squares never produce a strong, virile character?
22. In which houses are planets Feeble; in which Very Feeble?
23. What determines a planet's Power, or Volume of Influence?
24. What constitutes a planet's Harmony; what its Inharmony?
25. What determines a planet's Strength, or Tone Quality?







The Church of Light, Box 1525, Los Angeles, 53, Calif.

Branch Letter - D.  
Serial No. 89.


Course VIII.

Branch of Science-- Horary Astrology  
Subject-- The Doctrine of Horary Astrology.

Examination Questions.

1. In horary astrology, how closely should the rules be followed?
2. What is the First Factor that explains why a horary chart answers a question if the question is properly timed?
3. What is the Second Factor that explains why a horary chart answers a question if the question is properly timed?
4. Explain how the two factors operate together to give a correct answer to a horary question.
5. What three things does a horary chart map?
6. In erecting a horary chart, what is the correct time to use?
7. What is meant by the term QUERENT?
8. What is meant by the term QUESITED?
9. What is meant by the term SIGNIFICATOR?
10. What is meant by the term COSIGNIFICATOR?
11. What conditions in the chart indicate it is better not to pass judgment?
12. What is meant by MUTUAL RECEPTION, and what does it signify?
13. In what three ways are things, as indicated in a horary chart, brought to pass?
14. In what way is the time when an event will transpire indicated in horary astrology?
15. What is meant by VOID OF COURSE, and what does it signify?
16. What is meant by TRANSLATION OF LIGHT, and what does it signify?
17. What is meant by COLLECTION OF LIGHT, and what does it signify?
18. What is the significance of the DRAGON'S HEAD AND THE DRAGON'S TAIL?
19. What is indicated if one or more of the significators is retrograde?
20. If, before the aspect is fully complete, one of the significators turns RETROGRADE and the aspect is not fully formed, what is signified?
21. If, before the aspect between the significators is perfected, some other planet comes to a complete aspect to either of them, what is signified?
22. If, before the aspect between the significators is perfected, one of them must pass to a different sign, what is indicated?
23. When matters are brought about by a sextile, what may be expected?
24. When matters are brought about by a square, what may be expected?
25. Are matters commonly brought about by an opposition, and what may be expected from this aspect?







The Church of Light, Box 1525, Los Angeles, 53, Calif.

Branch Letter-- E.

Serial No. 90.

Course VIII.


Branch of Science-- Horary Astrology

Subject-- Questions Relating to the First Six Houses.

Examination Questions.

1. By inspecting a horary chart how can it be learned what the question is about?
2. In a horary chart or a natal chart how is it determined whether there will be greater success by going to a distance or remaining where one is?
3. In the Hermetic System, how are all directions determined?
4. In the Hermetic System, what indicates the kind of environment?
5. Does associating with the things ruled by a planet or sign change the quality of its energy?
6. In a natal chart or a horary chart, how would you determine the DIRECTION to move in order to have the greatest business success?
7. In a natal chart or a horary chart, how would you determine the kind of ENVIRONMENT to select to have the greatest business success?
8. In a natal chart or a horary chart, how would you determine the kind of ENVIRONMENT most favorable to health?
9. In a horary question regarding health what factors should be given close attention?
10. In a question of health, what signifies the health that may be expected in the near future?
11. Why should an astrologer refuse to predict death?
12. What factors should receive special attention in questions of money?
13. When money is shown to be gained or lost, how is the method by which this is brought about determined?
14. What conditions in a horary chart indicate a debt will be paid?
15. What indicates in a natal chart or a horary chart that there will be great wealth?
16. What conditions in a horary chart indicate a proposition will make money?
17. What conditions in a horary chart indicate the Querent will agree well with his neighbors?
18. In a horary chart, how is the condition of an absent brother or sister determined?
19. In a horary chart, how is the direction in which the brother is, from the Querent, determined?
20. In a horary chart, what indicates a lost or stolen article will be recovered?
21. In a question of real estate, what represents the value of the property to the Querent?
22. In a question of real estate, what represents the value of the property to the other person?
23. In a horary chart, how is it determined where a lost or stolen article is?
24. In a horary chart or a natal chart, what signifies there will be children?
25. In a horary chart or a natal chart, what signifies that tenants will be of a desirable character?







The Church of Light, Box 1525, Los Angeles, 53, Calif.

Branch Letter-- F.

Serial No. 91.

Course VIII.

Branch of Science-- Horary Astrology.

Subject-- Questions Relating to the Last Six Houses.

Examination Questions.

1. In a horary chart or a natal chart, what are the three factors that should be considered in a question of marriage?
2. In a horary chart or a natal chart, what indicates whether or not the first opportunity to marry is the best that can be expected?
3. In a horary chart or a natal chart, what indicates the kind of persons and fortune with them there is a tendency to attract in partnerships?
4. Subservient to this general fortune in partnership what, in a horary chart or a natal chart, more specifically describes the person there is the opportunity to marry?
5. In a horary or a natal chart, what indicates the conditions and circumstances under which the future husband or wife will be met?
6. In a horary chart, what indicates the querent will marry the person he has in mind?
7. In a horary chart, how is it determined that individuals, armies, or nations inquired about will fight?
8. In deciding the winner of contests, political elections and games, in what manner is the chart divided?
9. Which half of the chart represents the challenger?
10. Which half of the chart, when there is no definite challenger, represents the home team?
11. When the question is asked, and there is no definite challenger or home-team, how is it decided who is represented by the east side of the chart?
12. When it is decided who is represented by the east side of the chart, how is the winner selected?
13. How is it indicated in a conflict whether or not one opponent has a decided control over the other?
14. In a contest of short duration, when a malefic crosses the cusp of the 1st or 10th, what often happens?
15. How can a chart be erected to show the outcome of a race?
16. How can a chart be erected to show whether some stock or commodity will rise or fall in price?
17. What indicates how much money some person asked about has?
18. What indicates the querent should place no reliance on the advice of a certain alleged spirit?
19. What indicates that an expected inheritance will be received?
20. In a horary or natal chart, what indicates that the public will place great reliance on what the querent writes or says?
21. In a horary or a natal chart, what indicates there will be success in publishing, teaching or lecturing?
22. In a horary chart or a natal chart, what indicates the best business in which to engage?
23. In a horary chart what indicates the querent should engage in the business he contemplates?
24. In a horary or natal chart, what indicates the chief influence of friends?
25. In a horary or a natal chart, what indicates the chief influence of the querent's advantage over his private enemy?



Branch Letter # 7  
Serial No. 21

Branch of Science - Liberty Astrology  
Subject - Questions Relating to the Last Six Hours

Examination Questions

1. In a horary chart on a natal chart, what are the three factors that should be considered in a question of marriage?
2. In a horary chart on a natal chart, what are the three factors that should be considered in a question of marriage?
3. In a horary chart on a natal chart, what are the three factors that should be considered in a question of marriage?
4. In a horary chart on a natal chart, what are the three factors that should be considered in a question of marriage?
5. In a horary chart on a natal chart, what are the three factors that should be considered in a question of marriage?
6. In a horary chart on a natal chart, what are the three factors that should be considered in a question of marriage?
7. In a horary chart on a natal chart, what are the three factors that should be considered in a question of marriage?
8. In a horary chart on a natal chart, what are the three factors that should be considered in a question of marriage?
9. In a horary chart on a natal chart, what are the three factors that should be considered in a question of marriage?
10. In a horary chart on a natal chart, what are the three factors that should be considered in a question of marriage?
11. In a horary chart on a natal chart, what are the three factors that should be considered in a question of marriage?
12. In a horary chart on a natal chart, what are the three factors that should be considered in a question of marriage?
13. In a horary chart on a natal chart, what are the three factors that should be considered in a question of marriage?
14. In a horary chart on a natal chart, what are the three factors that should be considered in a question of marriage?
15. In a horary chart on a natal chart, what are the three factors that should be considered in a question of marriage?
16. In a horary chart on a natal chart, what are the three factors that should be considered in a question of marriage?
17. In a horary chart on a natal chart, what are the three factors that should be considered in a question of marriage?
18. In a horary chart on a natal chart, what are the three factors that should be considered in a question of marriage?
19. In a horary chart on a natal chart, what are the three factors that should be considered in a question of marriage?
20. In a horary chart on a natal chart, what are the three factors that should be considered in a question of marriage?